

Applications

1. Consider rectangles with an area of 16 square inches.
 - a. Copy and complete the table.

Rectangles With an Area of 16 in.²

Length (in.)	1	2	3	4	5	6	7	8
Width (in.)	■	■	■	■	■	■	■	■

- b. Make a graph of the data.
 - c. Describe the pattern of change in width as length increases.
 - d. Write an equation that shows how the width w depends on the length ℓ . Is the relationship linear?
2. Consider rectangles with an area of 20 square inches.
 - a. Make a table of length and width data for at least five rectangles.
 - b. Make a graph of your data.
 - c. Write an equation that shows how the width w depends on the length ℓ . Is the relationship linear?
 - d. Compare and contrast the graphs in this exercise and in Exercise 1.
 - e. Compare and contrast the equations in this exercise and in Exercise 1.
3. A student collected these data from the bridge-length experiment.

Bridge-Length Experiment

Length (in.)	4	6	8	9	10
Breaking Weight (pennies)	24	16	13	11	9

- a. Find an inverse variation equation that models these data.
- b. Explain how your equation shows that breaking weight decreases as length increases. Is this pattern reasonable for this situation? Explain.

For Exercises 4–7, tell whether the relationship between x and y is an inverse variation. If it is, write an equation for the relationship.

4.

x	1	2	3	4	5	6	7	8	9	10
y	10	9	8	7	6	5	4	3	2	1

5.

x	1	2	3	4	5	6	7	8	9	10
y	48	24	16	12	9.6	8	6.8	6	5.3	4.8

6.

x	2	3	5	8	10	15	20	25	30	40
y	50	33	20	12.5	10	6.7	5	4	3.3	2.5

7.

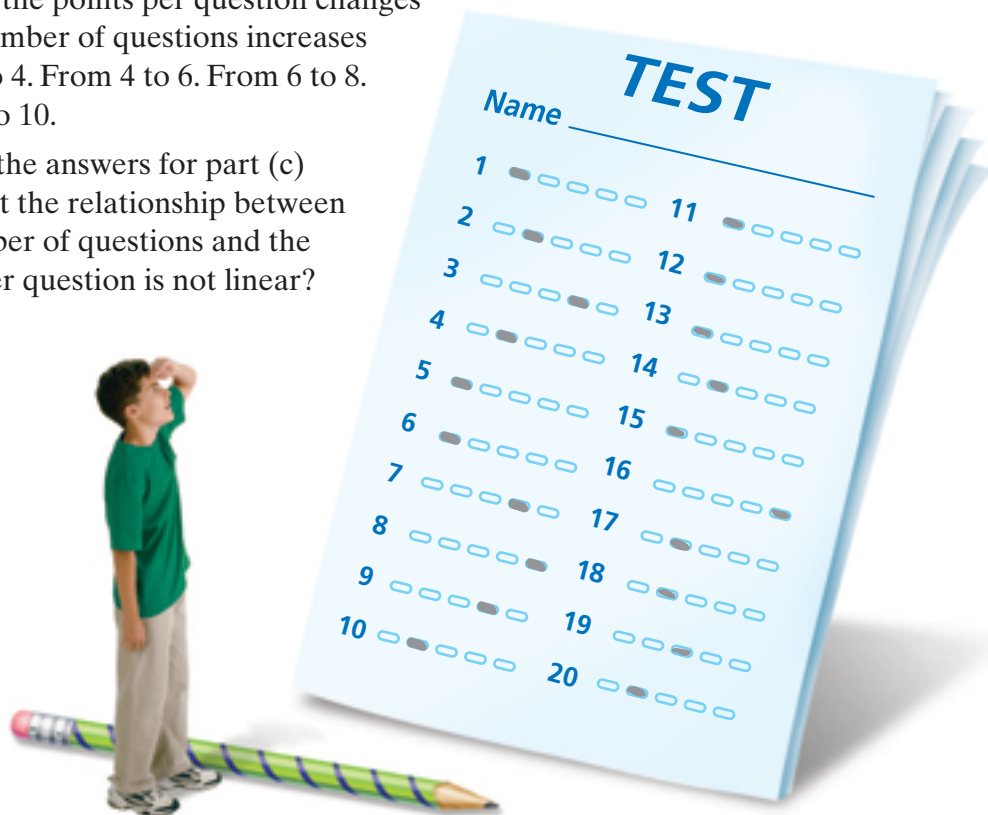
x	0	1	2	3	4	5	6	7	8	9
y	100	81	64	49	36	25	16	9	4	1

8. A marathon is a 26.2-mile race. The best marathon runners can complete the race in a little more than 2 hours.

- Make a table and graph that show how the average running speed for a marathon changes as the time increases. Show times from 2 to 8 hours in 1-hour intervals.
- Write an equation for the relationship between time t and average running speed s for a marathon.
- Tell how the average running speed changes as the time increases from 2 hours to 3 hours. From 3 hours to 4 hours. From 4 hours to 5 hours.
- How do the answers for part (c) show that the relationship between average running speed and time is not linear?




9. On one day of a charity bike ride, the route covers 50 miles. Individual riders cover this distance at different average speeds.
- Make a table and a graph that show how the riding time changes as the average speed increases. Show speed values from 4 to 20 miles per hour in intervals of 4 miles per hour.
 - Write an equation for the relationship between the riding time t and average speed s .
 - Tell how the riding time changes as the average speed increases from 4 to 8 miles per hour. From 8 to 12 miles per hour. From 12 to 16 miles per hour.
 - How do the answers for part (c) show that the relationship between average speed and time is not linear?
10. Students in Mr. Einstein's science class complain about the length of his tests. He argues that a test with more questions is better for students because each question is worth fewer points. All of Mr. Einstein's tests are worth 100 points. Each question is worth the same number of points.
- Make a table and a graph that show how the number of points per question changes as the number of questions increases. Show point values for 2 to 20 questions in intervals of 2.
 - Write an equation for the relationship between the number of questions n and the points per question p .
 - Tell how the points per question changes as the number of questions increases from 2 to 4. From 4 to 6. From 6 to 8. From 8 to 10.
 - How do the answers for part (c) show that the relationship between the number of questions and the points per question is not linear?



11. Testers drive eight vehicles 200 miles on a test track at the same speed. The table shows the amount of fuel each vehicle uses.

Fuel-Efficiency Test

Vehicle Type	Fuel Used (gal)
Large Truck	20
Large SUV	18
Limousine	16
Large Sedan	12
Small Truck	10
Sports Car	12
Compact Car	7
Sub-Compact Car	5



- a. Find the fuel efficiency in miles per gallon for each vehicle.
- b. Make a graph of the (*fuel used, miles per gallon*) data. Describe the pattern of change shown in the graph.
- c. Write a formula for calculating the fuel efficiency based on the fuel used for a 200-mile test drive.
- d. Tell how the fuel efficiency changes as the amount of fuel used increases from 5 to 10 gallons. From 10 to 15 gallons. From 15 to 20 gallons.
- e. How do the answers for part (d) show that the relationship between the fuel used and the fuel efficiency is not linear?

Connections

12. Suppose the town of Roseville is giving away lots with perimeters of 500 feet, rather than with areas of 21,800 square feet.
- a. Copy and complete this table.

**Rectangles With a
Perimeter of 500 Feet**

Length (ft)	■	■	■	■	■
Width (ft)	■	■	■	■	■

- Make a graph of the (*length, width*) data. Draw a line or curve that models the data pattern.
- Describe the pattern of change in width as length increases.
- Write an equation for the relationship between length and width. Is this a linear relationship? Explain.

A number b is the **additive inverse** of the number a if $a + b = 0$. For example, -5 is the additive inverse of 5 because $5 + (-5) = 0$. For Exercises 13–18, find the additive inverse of each number.

- | | | |
|-------------|--------------------|-------------------|
| 13. 2 | 14. $-\frac{6}{2}$ | 15. 2.5 |
| 16. -2.11 | 17. $\frac{7}{3}$ | 18. $\frac{3}{7}$ |

19. On a number line, graph each number in Exercises 13–18 and its additive inverse. Describe any patterns you see.

A number b is the **multiplicative inverse** of the number a if $ab = 1$. For example, $\frac{3}{2}$ is the multiplicative inverse of $\frac{2}{3}$ because $(\frac{2}{3})(\frac{3}{2}) = 1$. For Exercises 20–25, find the multiplicative inverse of each number.

- | | | |
|-------|-------------------|-------------------|
| 20. 2 | 21. -2 | 22. 0.5 |
| 23. 4 | 24. $\frac{3}{4}$ | 25. $\frac{5}{3}$ |

26. On a number line, graph each number in Exercises 20–25 and its multiplicative inverse. Describe any patterns you see.

Jamar takes a 10-point history quiz each week. Here are his scores on the first five quizzes: 8, 9, 6, 7, 10. Use this information for Exercises 27–28.

27. **Multiple Choice** What is Jamar's average quiz score?

- | | |
|------|------|
| A. 6 | B. 7 |
| C. 8 | D. 9 |

28. a. Jamar misses the next quiz and gets a 0. What is his average after six quizzes?
- b. After 20 quizzes, Jamar's average is 8. He gets a 0 on the 21st quiz. What is his average after 21 quizzes?
- c. Why did a score of 0 have a different effect on the average when it was the sixth score than when it was the 21st score?



Go Online
PHSchool.com
For: Multiple-Choice Skills Practice
Web Code: apa-1354

- 29.** Suppose a car travels at a speed of 60 miles per hour. The equation $d = 60t$ represents the relationship between the time t in hours and the distance d driven in miles. This relationship is an example of a *direct variation*. A relationship between variables x and y is a direct variation if it can be expressed as $y = kx$, where k is a constant.
- Find two relationships in this unit that are direct variations. Give the equation for each relationship.
 - For each relationship from part (a), find the ratio of the dependent variable to the independent variable. How is the ratio related to k in the general equation?
 - Suppose the relationship between x and y is a direct variation. How do y -values change as the x -values increase? How does this pattern of change appear in a graph of the relationship?
 - Compare direct variation and inverse variation. Be sure to discuss the graphs and equations for these types of relationships.

Solve the equation using a symbolic method. Then, describe how the solution can be found by using a graph and a table.

30. $5x - 28 = -3$

31. $10 - 3x = 7x - 10$

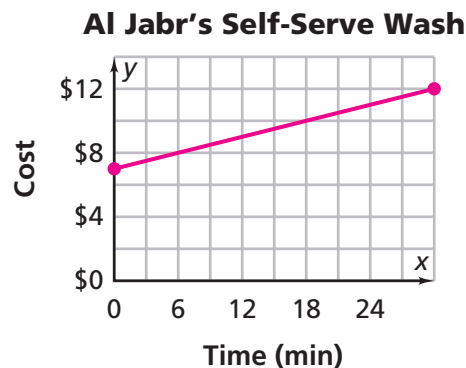
For Exercises 32–34, find the equation of the line with the given information.

32. slope $-\frac{1}{2}$, y -intercept $(0, 5)$

33. slope 3, passes through the point $(2, 2)$

34. passes through the points $(5, 2)$ and $(1, 10)$

35. Find the equation for the line below.



- 36.** Suppose 6 cans of tomato juice cost \$3.20. Find the cost for
- 1 can
 - 10 cans
 - n cans

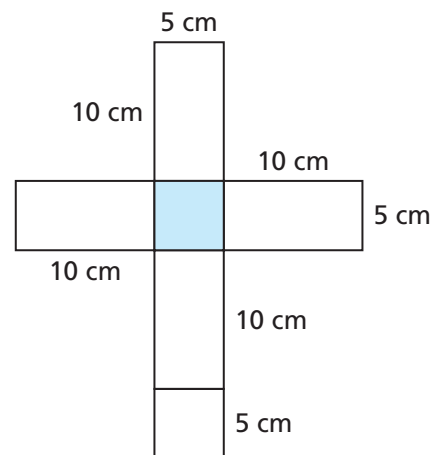
For Exercises 37–39, tell which store offers the better buy. Explain your choice.

37. *Gus's Groceries*: Tomatoes are 6 for \$4.00
Super Market: Tomatoes are 8 for \$4.60
38. *Gus's Groceries*: Cucumbers are 4 for \$1.75
Super Market: Cucumbers are 5 for \$2.00
39. *Gus's Groceries*: Apples are 6 for \$3.00
Super Market: Apples are 5 for \$2.89



Extensions

40. This net folds up to make a rectangular prism.
- What is the volume of the prism?
 - Suppose the dimensions of the shaded face are doubled. The other dimensions are adjusted so that the volume remains the same. What are the dimensions of the new prism?
 - Which prism has the smaller surface area, the original prism or the prism from part (b)? Explain.



41. Ms. Singh drives 40 miles to her sister's house. Her average speed is 20 miles per hour. On her way home, her average speed is 40 miles per hour. What is her average speed for the round trip?

- 42.** The drama club members at Henson Middle School are planning their spring show. They decide to charge \$4.50 per ticket. They estimate their expenses for the show at \$150.
- Write an equation for the relationship between the number of tickets sold and the club's total profit.
 - Make a table to show how the profit changes as the ticket sales increase from 0 to 500 in intervals of 50.
 - Make a graph of the (*tickets sold*, *total profit*) data.
 - Add a column (or row) to your table to show the per-ticket profit for each number of tickets sold. For example, for 200 tickets, the total profit is \$750, so the per-ticket profit is $\$750 \div 200$, or \$3.75.
 - Make a graph of the (*tickets sold*, *per-ticket profit*) data.
 - How are the patterns of change for the (*tickets sold*, *total profit*) data and (*tickets sold*, *per-ticket profit*) data similar? How are they different? How are the similarities and differences shown in the tables and graphs of each relationship?

For Exercises 43–45, find the value of c for which both ordered pairs satisfy the same inverse variation. Then, write an equation for the relationship.

43. $(3, 16), (12, c)$

44. $(3, 9), (4, c)$

45. $(3, 4), (4, c)$

- 46. Multiple Choice** The force acting on a falling object due to gravity is related to the mass and acceleration of the object. For a fixed force F , the relationship between mass m and acceleration a is an inverse variation. Which equation shows the relationship between F , m , and a ?

A. $F = ma$

B. $m = Fa$

C. $\frac{m}{F} = a$

D. $\frac{m}{a} = F$

- 47. Multiple Choice** Suppose the time t in the equation $d = rt$ is held constant. What happens to the distance d as the rate r increases?
- d decreases.
 - d increases.
 - d stays constant.
 - There is not enough information.
- 48. Multiple Choice** Suppose the distance d in the equation $d = rt$ is held constant. What happens to the time t as the rate r increases?
- t decreases.
 - t increases.
 - t stays constant.
 - There is not enough information.

